




## HOW MUCH DOES IT COST?

Use various resources (internet, newspaper ads, etc) to find at least 3 different prices for the following items.

<p>12 oz. bag of coffee beans</p>  <p>\$ _____ \$ _____ \$ _____</p>	<p>Towel</p>  <p>\$ _____ \$ _____ \$ _____</p>
<p>Pen</p>  <p>\$ _____ \$ _____ \$ _____</p>	<p>Pick Your Own Item</p> <div data-bbox="948 1045 1308 1243" style="border: 1px solid black; height: 94px; width: 222px; margin: 0 auto;"></div> <p>\$ _____ \$ _____ \$ _____</p>

What was the range between the lowest and highest prices for each item?

---

Why do you think similar items are priced differently?

---

---